












### Exercise 1: simple maps

Study the **Key** and the Maps 1-6 below  
**Key**

	Bridge (2003)
	Road
	Airport (2001)
	National park (1997)
	Wind farm (near future)

	Mountains
	Industrial complex (2003)
	River
	Capital city
	Fish farm (2002)

1.



4.




2.



5.



3.



6.



Now make a sentence for each map. One sentence has been done for you.

**A** lies in the south west of the island of Simia.

**C** the north of the island of Simia to the east coast.

**B** An airport was

**D** the east to the south west coast.

**E** lies in the north

**F** A road runs from

**G** A national park,

**H** An industrial complex was

**I** opened in 2001

**J** on the south-east coast

**K** The capital city

**L** west of the island of Simia.

**M** A river

**N** of the island of Simia.

**O** flows from the mountains in

**P** built in 2003 on the west coast of the island.

**Q** which was established in 1997,

## Key

1. An airport was opened in 2001 on the south-east coast of the island of Simia.
2. The capital city lies in the north west of the island of Simia.
3. A road runs from the east to the south west coast.
4. A river flows from the mountains in the north of the island of Simia to the east coast.
5. A national park, which was established in 1997, lies in the south west of the island of Simia.
6. An industrial complex was built in 2003 on the west coast of the island.